


prénom : _____


date : ____ / ____ / ____

Fiche n° 19




$$6 > 4$$

6 est plus grand que 4



$$4 = 4$$


4 est égal à 4

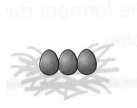



$$5 < 7$$


5 est plus petit que 7


1 /  Complète avec les signes $<$, $>$ ou $=$.















2 /  Complète avec les signes $<$, $>$ ou $=$.

5 _____ 2 3 _____ 3 6 _____ 0 4 _____ 7

7 _____ 4 1 _____ 5 0 _____ 0 2 _____ 4

3 /  Écris un nombre qui convient.

5 = _____ 2 > _____ 3 < _____ 6 > _____

7 < _____ 4 = _____ 1 > _____ 0 < _____

4 /  Calcule en colonnes.

$$\begin{array}{r} 7 \\ - 4 \\ \hline \end{array}$$

$$\begin{array}{r} 4 \\ + 2 \\ \hline \end{array}$$

$$\begin{array}{r} 7 \\ - 3 \\ \hline \end{array}$$

$$\begin{array}{r} 7 \\ - 5 \\ \hline \end{array}$$

$$\begin{array}{r} 6 \\ + 1 \\ \hline \end{array}$$