

prénom : _____


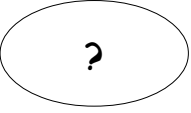


date : ____ / ____ / ____


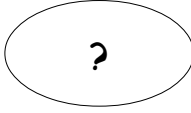


Fiche n° 2


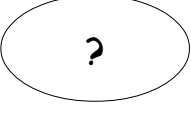


1 /  Écris une ligne de 2 comme le modèle.


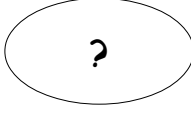


2	2										

2 /  Écris ce qui s'est passé.






 1		→	 2
		=	

 2		→	 1
		=	

 1		→	 0
		=	

 0		→	 2
		=	

3 /  Calcule en colonne.

2	1	1	2	2
- 1	- 1	+ 1	- 2	+ 0
_____	_____	_____	_____	_____
				

4 /  Calcule en ligne.

2	-	2	=	_____	0	+	1	=	_____
2	-	1	=	_____	1	-	1	=	_____
1	+	1	=	_____	2	+	0	=	_____